

## Some Representations for:

$$18 + 16$$

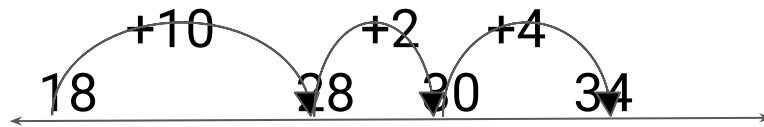
## Number sentences

$$18 + 10 \rightarrow 28$$

$$28 + 2 \rightarrow 30$$

$$30 + 4 \rightarrow 34$$

## Number Line

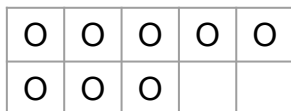
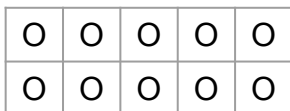
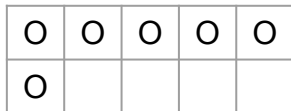
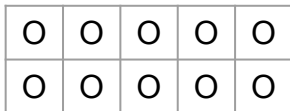


+1 +1 +1 +1 +1 +1 +1 +1 +1 +1 +1 +1 +1 +1 +1 +1 +1 +1 +1




18 19 20 21 22 23 24 25 26 27 28 29 30 31 32 33 34 35 36

## Ten Frames

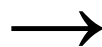


## Hundreds Chart



## Base-Ten Language

1 . . . . .



111 . . . .

1 . . . . .